


Whos at the Zoo?

Count and write the amount of objects in each set. Then, add the sets together and write the answer in the space provided.

1 + 2 =

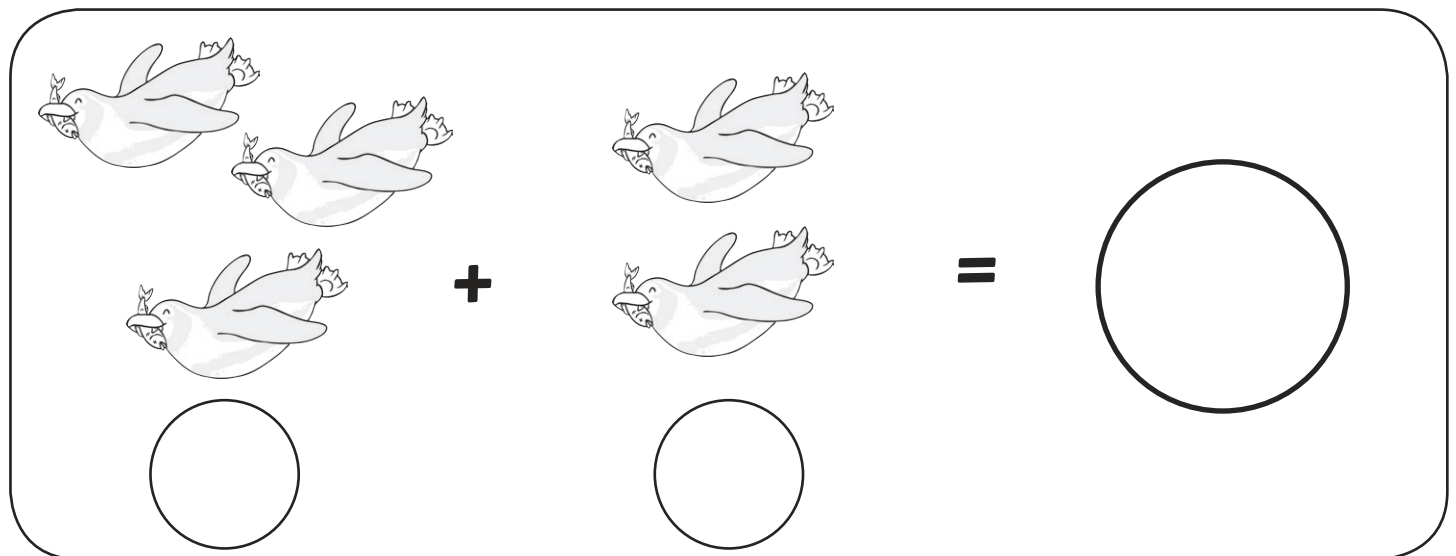
2 + 3 =

2 + 2 =



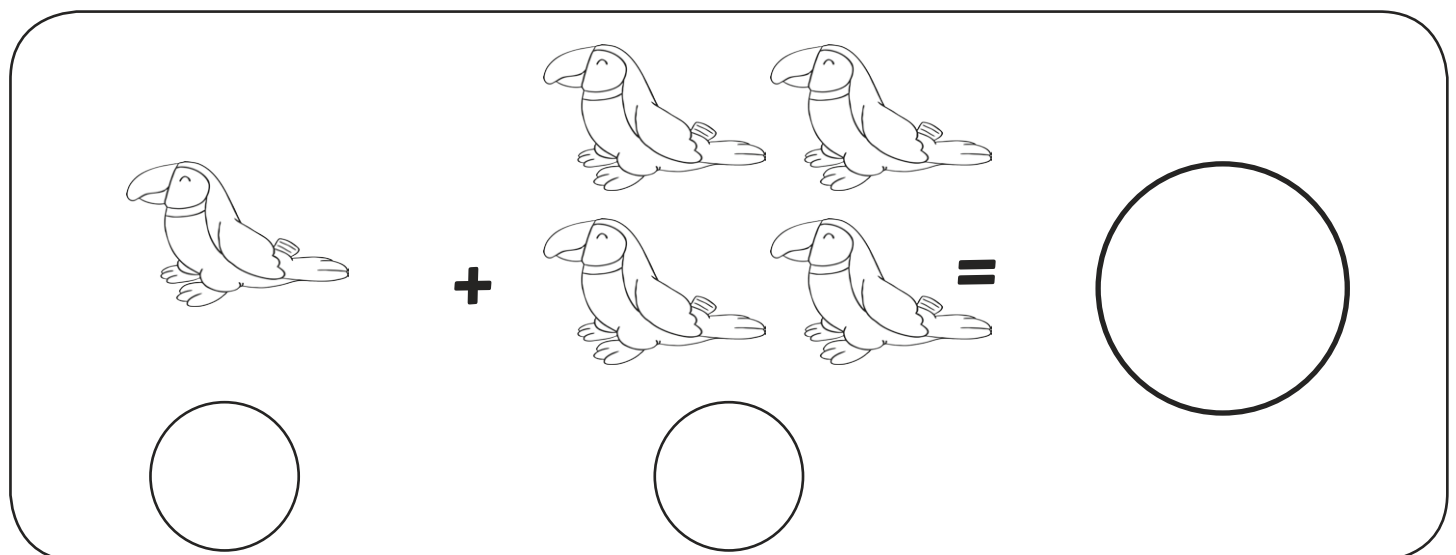
4 monkeys + 1 monkey =

This exercise shows four monkeys in a 2x2 grid on the left, followed by a plus sign, one monkey in the center, an equals sign, and a large empty circle on the right. Below the first group of monkeys and the single monkey are two empty circles for writing the numbers.



3 birds + 2 birds =

This exercise shows three birds in a 2x2 grid (with the bottom-right position empty) on the left, followed by a plus sign, two birds in the center, an equals sign, and a large empty circle on the right. Below the first group of birds and the two birds are two empty circles for writing the numbers.



1 toucan + 4 toucans =

This exercise shows one toucan on the left, followed by a plus sign, four toucans in a 2x2 grid in the center, an equals sign, and a large empty circle on the right. Below the first toucan and the four toucans are two empty circles for writing the numbers.

Answer Sheet

1. 3

2. 5

3. 4

4. 4

5. 5

6. 5